



Our Vision: Innovative education for a knowledge, pioneering, and global society.

SUB:MATHEMATICS

WORKSHEET2018 - 2019

WHOLE NUMBERS 2 L(1 To 8)

Name : Roll no. : Grade :1 Sec:

I) a) Count the ping pong paddles by 2s and write the total number.



b) Complete the numbers below

2 4 6 ___ 10 12 ___ 16 18 20

6 8 10 ___ 14 16 18 ___



8 10 12 14 ___ ___ 20

II) a) Write the missing numbers

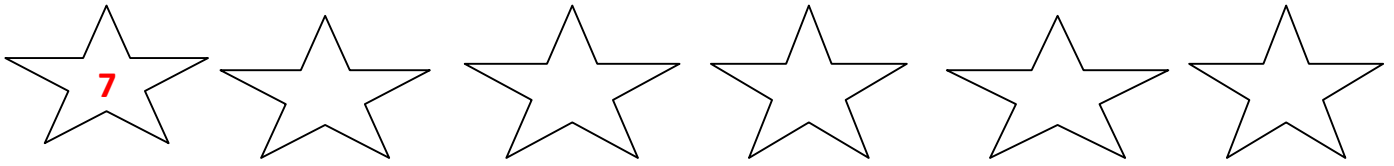
20 30 50

60 90

b) Count on in 10s



c) Start at 7 .Count on in 10s



III) a) Draw a ring around the number which is even

a) 9 b) 3 c) 4 d) 11

b) How many odd numbers are there in between 2 and 8

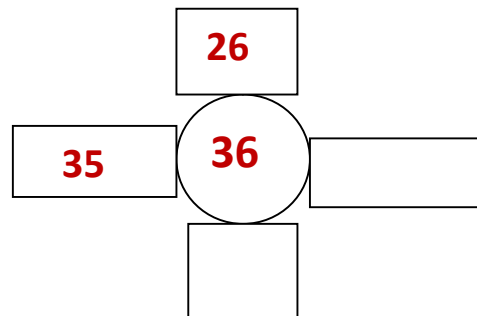
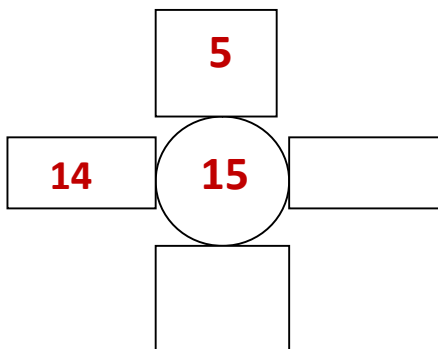
c) Find the odd number from the given numbers and circle it

a) 14 b) 18 c) 21 d) 4

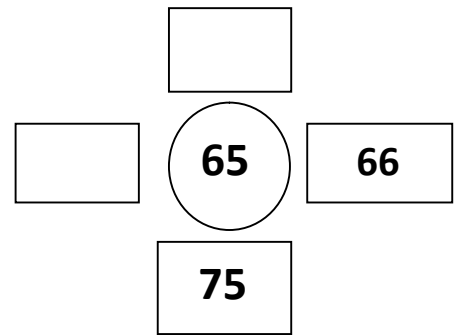
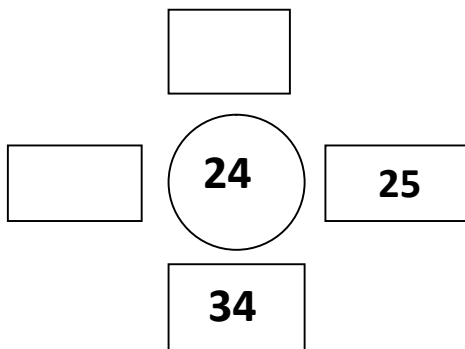
d) How many leaves? Odd or even ?



IV) a) Find 1 more and 10 more



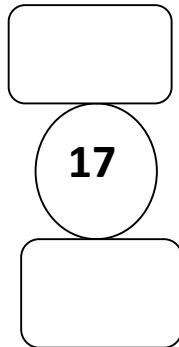
b) Find 1 less and 10 less



c) Find 1 more and less for the following



d) Find 10 more and less for the following



v) a) Write the numbers between



b) Fill in the boxes so that the numbers are in order (Hint: you can use any number which comes between the given numbers)

a) 3 6 10

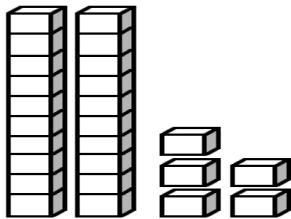
b) 22 35

VI) Put the suitable alphabets in the middle column to match. One is done for you.

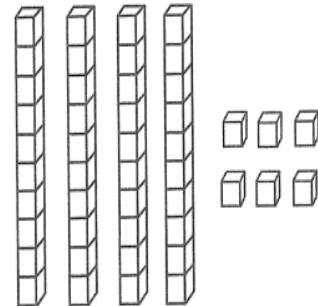
4th	e	a) Second
3 rd		b) Ninth
5th		c) First
9th		d) Third
1st		e) Fourth
8th		f) Fifth
2nd		g) Eighth

VII) Write the number shown

a)

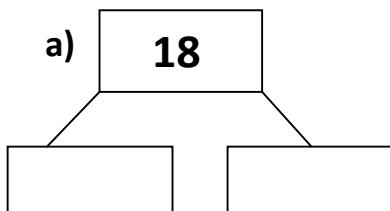


b)

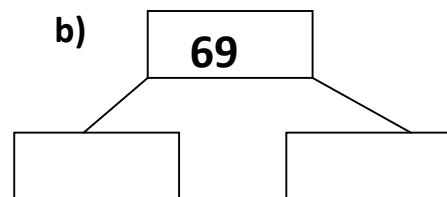


VIII) Partition the numbers and write the tens and ones

a)



b)



IX) Colour the ones digit for the following numbers

a) 2 8

b) 4 6

X) In the London Marathon Fathima came 3 places behind the girl who came 6th place. What position did Fathima get?