



Our Vision: Innovative education for a knowledge, pioneering, and global society.

Department of Science 2018 - 2019
Second Term: Worksheet - 1
Topic: Light and dark L-4.3 Shadows

Grade 2.....

Name:.....

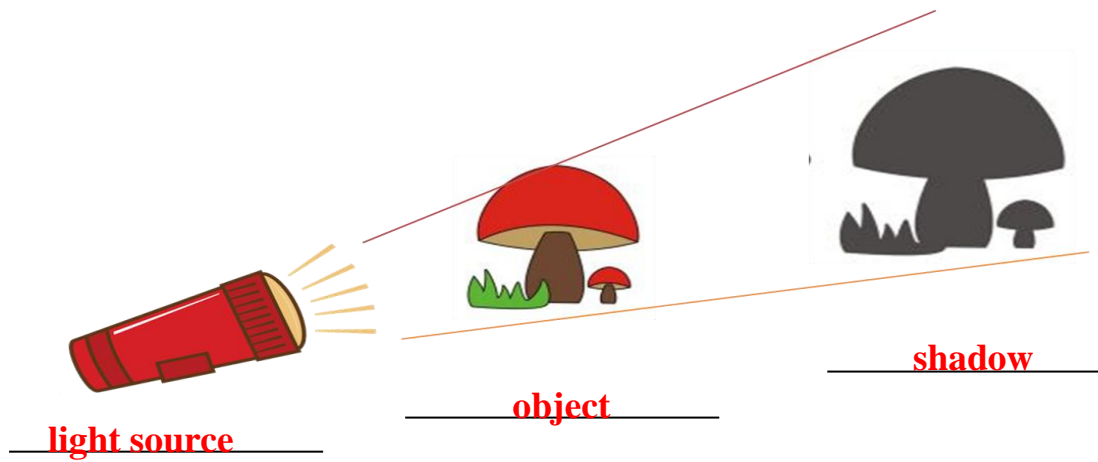
Date:/...../2019

Q.1. Fill in the blanks with the help of given words.


- Sun is a natural source of light. [natural / man- made]
- Shadows are formed on the opposite side of light [same / opposite]
- Light travels in a straight line. [curved / straight]
- Shadows are long in the morning and evening. [long / short]

Q.2. Label the diagram correctly.


Write: shadow - light source - object



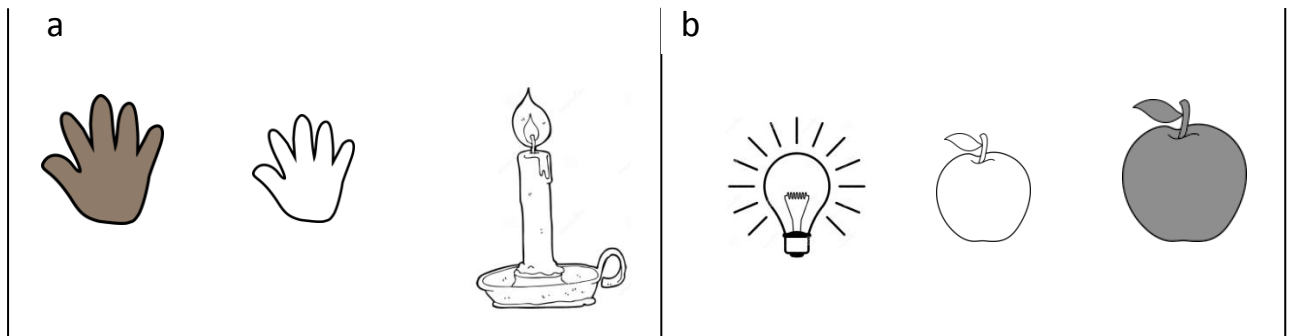
Q.3. Circle the pictures that show the correct shadow formations.



Q.4. Circle the correct shadow.



Q.5. Look at the pictures. Colour the shadows.



Q.6. Identify and name the objects from their shadows.

